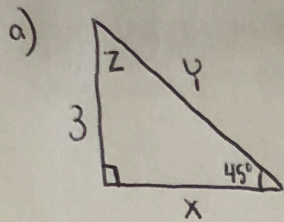


Unit 6 - Triangles COVID-19 Review

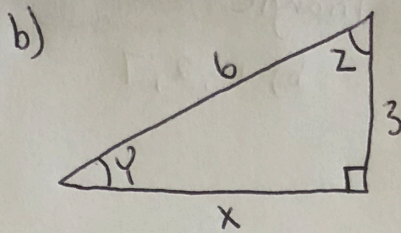
④ complete the special right triangles.



$x =$

$y =$

$z =$



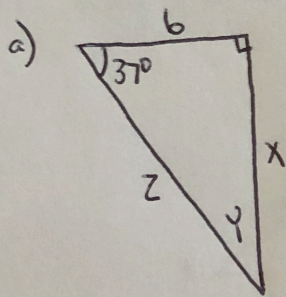
$x =$

$y =$

$z =$

⑤ What is SOH-CAH-TOA

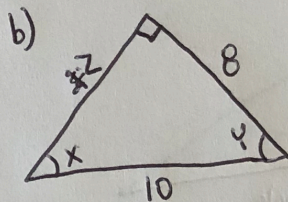
⑥ Find the missing parts: - try using sin, cos, tan



$x =$

$y =$

$z =$



$x =$

$y =$

$z =$